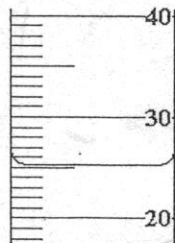


Homework


September 17, 2014
CHEMISTRY-GENEST

Name _____

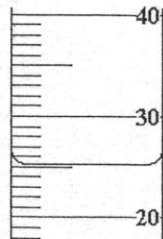
1. Express the following readings to the proper number of significant digits. They are measured in milliliters (mL).



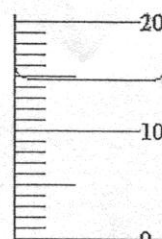
a. _____



b. _____

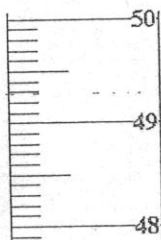


c. _____

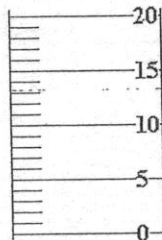


d. _____


2. Draw in the meniscus for the following readings:



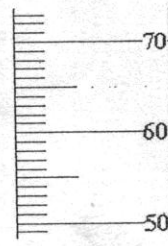
a. 49.21 mL



b. 18.2 mL



c. 27.65 mL



d. 63.8 mL

3. Measure the following temperatures. The units for all thermometers is °C.

Find the temperature for each thermometer.

